

Write your name here

Surname

Other names

Pearson Edexcel Certificate

Centre Number

Candidate Number

**Pearson Edexcel
International GCSE**

--	--	--	--	--

--	--	--	--

Chemistry

Unit: KCH0/4CH0

Paper: 2C

Wednesday 18 January 2017 – Afternoon

Time: 1 hour

Paper Reference

**KCH0/2C
4CH0/2C**

You must have:

Calculator

Total Marks

Instructions

- Use **black** ink or ball-point pen.
- **Fill in the boxes** at the top of this page with your name, centre number and candidate number.
- Answer **all** questions.
- Answer the questions in the spaces provided
– *there may be more space than you need.*
- Show all the steps in any calculations and state the units.
- Some questions must be answered with a cross in a box ☒. If you change your mind about an answer, put a line through the box ☒ and then mark your new answer with a cross ☒.

Information

- The total mark for this paper is 60.
- The marks for **each** question are shown in brackets
– *use this as a guide as to how much time to spend on each question.*

Advice

- Read each question carefully before you start to answer it.
- Write your answers neatly and in good English.
- Try to answer every question.
- Check your answers if you have time at the end.

Turn over ►

P48389A

©2017 Pearson Education Ltd.

1/2/1/1/1/1/




Pearson

THE PERIODIC TABLE

Period 1 2 3 4 5 6 7 0

Group

Period

4	He	Helium	2
---	----	--------	---

1	H	Hydrogen	1
---	---	----------	---

7	Li	Lithium	3	9	Be	Beryllium	4	20	Ne	Neon	10
23	Na	Sodium	11	24	Mg	Magnesium	12	31	P	Phosphorus	15
39	K	Potassium	19	40	Ca	Calcium	20	70	Ge	Germanium	32
86	Rb	Rubidium	37	88	Sr	Strontium	38	115	In	Indium	49
133	Cs	Caesium	55	137	Ba	Barium	56	204	Tl	Thallium	81
223	Fr	Francium	87	226	Ra	Radium	88	207	Pb	Lead	82
227	Ac	Actinium	89	227	Fr	Francium	87	208	Bi	Bismuth	83
45	Sc	Scandium	21	46	Ti	Titanium	22	59	Co	Cobalt	27
89	Y	Yttrium	39	90	Zr	Zirconium	40	106	Pd	Palladium	46
139	La	Lanthanum	57	140	Hf	Hafnium	72	195	Pt	Platinum	78
179	Ta	Tantalum	73	181	W	Tungsten	74	197	Au	Gold	79
227	Ac	Actinium	89	227	Fr	Francium	87	201	Hg	Mercury	80
89	Y	Yttrium	39	90	Zr	Zirconium	40	106	Pd	Palladium	46
139	La	Lanthanum	57	140	Hf	Hafnium	72	195	Pt	Platinum	78
179	Ta	Tantalum	73	181	W	Tungsten	74	197	Au	Gold	79
201	Hg	Mercury	80	201	Hg	Mercury	80	201	Hg	Mercury	80
106	Pd	Palladium	46	106	Pd	Palladium	46	106	Pd	Palladium	46
112	Cd	Cadmium	48	112	Cd	Cadmium	48	112	Cd	Cadmium	48
108	Ag	Silver	47	108	Ag	Silver	47	108	Ag	Silver	47
63.5	Cu	Copper	29	63.5	Cu	Copper	29	63.5	Cu	Copper	29
59	Ni	Nickel	28	59	Ni	Nickel	28	59	Ni	Nickel	28
56	Fe	Iron	26	56	Fe	Iron	26	56	Fe	Iron	26
101	Ru	Ruthenium	44	101	Ru	Ruthenium	44	101	Ru	Ruthenium	44
190	Os	Osmium	76	190	Os	Osmium	76	190	Os	Osmium	76
186	Re	Rhenium	75	186	Re	Rhenium	75	186	Re	Rhenium	75
184	W	Tungsten	74	184	W	Tungsten	74	184	W	Tungsten	74
93	Nb	Niobium	41	93	Nb	Niobium	41	93	Nb	Niobium	41
96	Mo	Molybdenum	42	96	Mo	Molybdenum	42	96	Mo	Molybdenum	42
52	Cr	Chromium	24	52	Cr	Chromium	24	52	Cr	Chromium	24
55	Mn	Manganese	25	55	Mn	Manganese	25	55	Mn	Manganese	25
56	Fe	Iron	26	56	Fe	Iron	26	56	Fe	Iron	26
59	Co	Cobalt	27	59	Co	Cobalt	27	59	Co	Cobalt	27
106	Pd	Palladium	46	106	Pd	Palladium	46	106	Pd	Palladium	46
112	Cd	Cadmium	48	112	Cd	Cadmium	48	112	Cd	Cadmium	48
119	Sn	Tin	50	119	Sn	Tin	50	119	Sn	Tin	50
122	Sb	Antimony	51	122	Sb	Antimony	51	122	Sb	Antimony	51
127	I	Iodine	53	127	I	Iodine	53	127	I	Iodine	53
128	Te	Tellurium	52	128	Te	Tellurium	52	128	Te	Tellurium	52
79	Se	Selenium	34	79	Se	Selenium	34	79	Se	Selenium	34
35.5	Cl	Chlorine	17	35.5	Cl	Chlorine	17	35.5	Cl	Chlorine	17
32	S	Sulfur	16	32	S	Sulfur	16	32	S	Sulfur	16
16	O	Oxygen	8	16	O	Oxygen	8	16	O	Oxygen	8
19	F	Fluorine	9	19	F	Fluorine	9	19	F	Fluorine	9
20	Ne	Neon	10	20	Ne	Neon	10	20	Ne	Neon	10

Key

Relative atomic mass
Symbol
Name
Atomic number

DO NOT WRITE IN THIS AREA

DO NOT WRITE IN THIS AREA

DO NOT WRITE IN THIS AREA



DO NOT WRITE IN THIS AREA

DO NOT WRITE IN THIS AREA

DO NOT WRITE IN THIS AREA

Answer ALL questions.

1 The box contains the names of some substances.

air	chlorine	hydrogen	iron
nitrogen	oxygen	potassium	sodium

Choose a substance from the box that best matches each description.

Each substance may be used once, more than once or not at all.

(a) Which substance is a mixture? (1)

.....

(b) Which substance is a gas that makes a squeaky pop when ignited? (1)

.....

(c) Which substance is an element that is a green gas at room temperature? (1)

.....

(d) Which substance is used to sterilise water? (1)

.....

(e) Which substance is a metal that can be made by heating its oxide with carbon? (1)

.....

(Total for Question 1 = 5 marks)



2 Oxides can be made by burning elements in air.

The table gives some information about the oxides of four elements.

Element	Physical state of oxide at room temperature	Solubility of oxide in water	Type of solution formed when oxide dissolves in water
calcium	solid	slightly soluble	alkaline
carbon	gas	slightly soluble	acidic
magnesium	solid	slightly soluble	alkaline
sulfur	gas	very soluble	acidic

(a) Calcium and magnesium are metals. Carbon and sulfur are non-metals.

(i) Using only information from the table, state two ways in which the oxides of the metals are similar to each other.

(1)

.....

.....

.....

.....

(ii) Using only information from the table, state two ways in which the oxides of the non-metals are similar to each other.

(1)

.....

.....

.....

.....



DO NOT WRITE IN THIS AREA

DO NOT WRITE IN THIS AREA

DO NOT WRITE IN THIS AREA

(b) A teacher tells his students that when phosphorus burns in air a white solid oxide forms. This oxide is very soluble in water and forms an acidic solution.

(i) One student states that phosphorus is a metal.

Use information from the table to suggest why the student made this statement. (1)

.....

.....

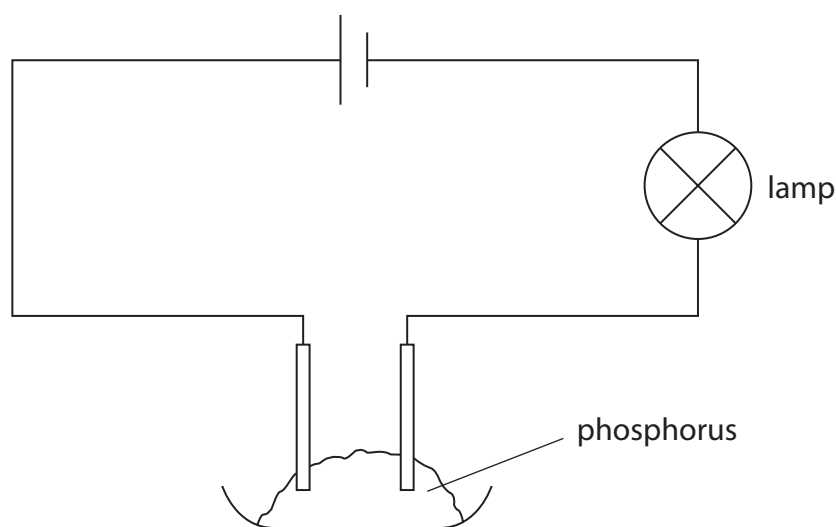
(ii) Another student states that phosphorus is a non-metal.

Use information from the table to suggest why the student made this statement. (1)

.....

.....

(c) An experiment using this apparatus shows that phosphorus is a non-metal.



Explain how this experiment shows that phosphorus is a non-metal. (2)

.....

.....

.....

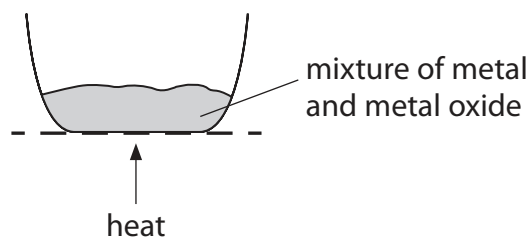
.....

(Total for Question 2 = 6 marks)



3 This question is about the reactivity of metals.

(a) This apparatus can be used to compare the reactivities of different metals.



A metal is heated with the oxide of a different metal.

The table shows the results of two experiments.

Mixture	Result
titanium + tin oxide	reaction
titanium + calcium oxide	no reaction

Explain how these results show the order of reactivity of calcium, tin and titanium.

(3)

.....

.....

.....

.....

.....

.....

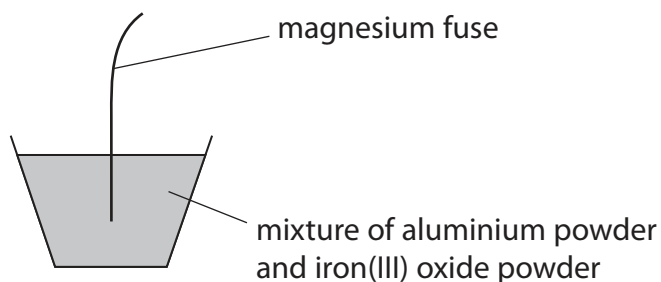


DO NOT WRITE IN THIS AREA

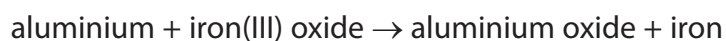
DO NOT WRITE IN THIS AREA

DO NOT WRITE IN THIS AREA

(b) The diagram shows a method of making iron.



(i) The word equation for the reaction that occurs is



Write a chemical equation for this reaction.

(1)

(ii) Explain which substance is oxidised in this reaction.

(2)

(iii) Explain why aluminium and iron(III) oxide are used in powdered form rather than large pieces.

(2)

(Total for Question 3 = 8 marks)



4 Chemical tests can be used to detect ions in solids and in aqueous solutions.

(a) A solid produces a gas when heated with sodium hydroxide solution. Damp red litmus paper is turned blue by the gas.

Which of these ions is present in the solid?

(1)

- A Cu^{2+}
- B Fe^{2+}
- C Fe^{3+}
- D NH_4^+

(b) When dilute nitric acid is added to an aqueous solution, followed by silver nitrate solution, a yellow precipitate forms.

Which of these halide ions is present in the aqueous solution?

(1)

- A Br^-
- B Cl^-
- C F^-
- D I^-

(c) When dilute hydrochloric acid is added to a solid, a gas forms.

Which of these ions is present in the solid?

(1)

- A carbonate
- B hydroxide
- C nitrate
- D sulfate



(d) Sodium hydroxide solution is added separately to three solutions.

One solution contains Cu^{2+} ions, another contains Fe^{2+} ions and the third solution contains Fe^{3+} ions.

Which row shows the correct colours of the precipitates that form?

(1)

	Cu^{2+}	Fe^{2+}	Fe^{3+}
<input type="checkbox"/> A	green	blue	brown
<input type="checkbox"/> B	brown	green	blue
<input type="checkbox"/> C	blue	green	brown
<input type="checkbox"/> D	blue	brown	green

(e) When barium chloride solution is added to an aqueous solution of a compound, a white precipitate forms. When dilute hydrochloric acid is added to the mixture, the precipitate disappears and a colourless solution forms.

Which of these ions is present in the aqueous solution?

(1)

- A carbonate
- B chloride
- C nitrate
- D sulfate

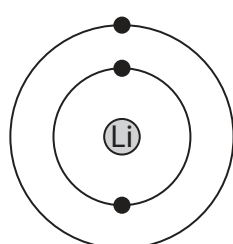
(Total for Question 4 = 5 marks)



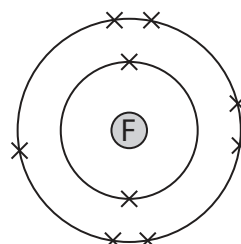
5 Lithium and carbon both form fluorides.

(a) Lithium reacts with fluorine to produce the ionic compound lithium fluoride.

The diagrams show the arrangement of electrons in a lithium atom and in a fluorine atom.



lithium atom



fluorine atom

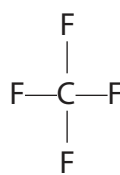
Draw similar diagrams to show the arrangement of the electrons in the ions formed when lithium reacts with fluorine.

Show all the electrons in each ion.

(2)

(b) Carbon tetrafluoride is a simple molecular compound.

The displayed formula for a molecule of carbon tetrafluoride is



Draw a dot and cross diagram to show the arrangement of the electrons in this molecule.

Show only the outer electrons.

(2)



DO NOT WRITE IN THIS AREA

DO NOT WRITE IN THIS AREA

DO NOT WRITE IN THIS AREA

(c) The table shows some properties of lithium fluoride and carbon tetrafluoride.

Compound	Melting point	Ability to conduct electricity when molten or liquid
lithium fluoride	high	good
carbon tetrafluoride	low	poor

Explain these properties of each compound.

(4)

lithium fluoride

.....

.....

.....

.....

.....

carbon tetrafluoride

.....

.....

.....

.....

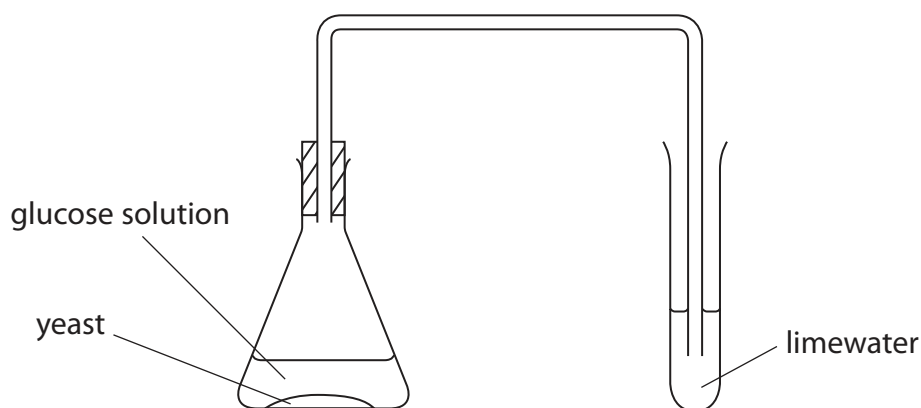
.....

(Total for Question 5 = 8 marks)

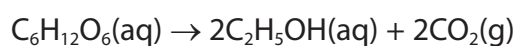


6 Ethanol can be produced when yeast is added to a glucose solution.

This apparatus is used to investigate the reaction.



(a) The equation for the reaction is



(i) State the purpose of the yeast.

(1)

(ii) State how the appearance of the limewater changes during the reaction.

(1)

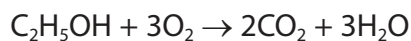
(iii) State the temperature at which this reaction is carried out in industry.

(1)



(b) Ethanol can be used as a fuel.

This is the equation for the complete combustion of ethanol.



These are the displayed formulae for ethanol, oxygen, carbon dioxide and water.

$\begin{array}{c} \text{H} \quad \text{H} \\ \quad \\ \text{H}-\text{C}-\text{C}-\text{O}-\text{H} \\ \quad \\ \text{H} \quad \text{H} \end{array}$	$\text{O}=\text{O}$	$\text{O}=\text{C}=\text{O}$	$\text{H}-\text{O}-\text{H}$
ethanol	oxygen	carbon dioxide	water

The table gives some average (mean) bond energies.

Bond	Average bond energy in kJ/mol
C—C	348
C—H	412
C—O	360
H—O	463
O=O	496
C=O	743

Use this information to calculate the enthalpy change (ΔH) when one mole of ethanol is completely burned.

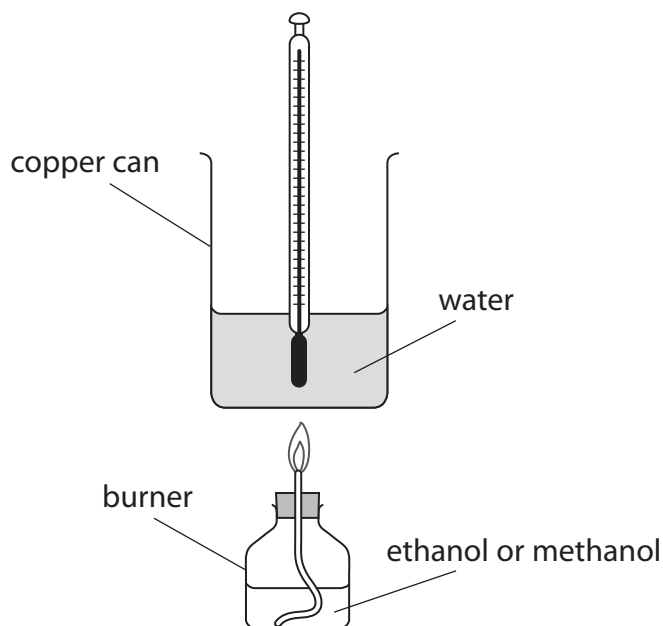
(4)

enthalpy change (ΔH) = kJ/mol



(c) Ethanol and methanol can both be used as fuels.

A student uses this apparatus to find out how much energy is produced when one mole of ethanol and one mole of methanol are burned.



The table shows some of the student's results.

Fuel	Formula mass of fuel	Energy given out by 1.00 g of fuel in kJ	Energy given out by 1 mol of fuel in kJ
ethanol (C ₂ H ₅ OH)	46.0	20.9	961
methanol (CH ₃ OH)		15.6	

(i) Calculate the energy given out by 1 mol of methanol.

(2)

energy given out = kJ



(ii) The student uses the same burner and copper can in each experiment.

State two other factors that the student should keep the same in each experiment. (2)

1

2

(iii) A data book states that the energy given out when 1 mol of ethanol is burned is 1371 kJ.

Suggest two reasons why the student's value is much less than this. (2)

1

2

(Total for Question 6 = 13 marks)

DO NOT WRITE IN THIS AREA

DO NOT WRITE IN THIS AREA

DO NOT WRITE IN THIS AREA



- 7 Magnesium chloride can be made by reacting excess magnesium carbonate with dilute hydrochloric acid.

The equation for the reaction is



- (a) (i) In one experiment, a sample of 0.050 mol of MgCO_3 is added to 0.080 mol of HCl.

Show, by calculation, that the MgCO_3 is in excess.

(2)

- (ii) Calculate the maximum volume, in cm^3 , of carbon dioxide, measured at room temperature and pressure, that would be obtained when 0.080 mol of HCl react completely with MgCO_3 .

[One mole of any gas occupies 24 000 cm^3 at room temperature and pressure.]

(2)

maximum volume of carbon dioxide = cm^3



DO NOT WRITE IN THIS AREA

DO NOT WRITE IN THIS AREA

DO NOT WRITE IN THIS AREA

(b) In another experiment 0.050 mol of MgCO_3 reacts with excess HCl.

A yield of 5.5 g of $\text{MgCl}_2 \cdot 6\text{H}_2\text{O}$ is obtained.

(i) Calculate the percentage yield of $\text{MgCl}_2 \cdot 6\text{H}_2\text{O}$

(2)

percentage yield = %

(ii) Suggest why the percentage yield is less than 100%.

(1)

.....

.....

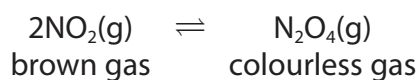
.....

(Total for Question 7 = 7 marks)



- 8 When nitrogen dioxide gas (NO_2) is placed in a sealed flask, it reacts to form dinitrogen tetraoxide gas (N_2O_4).

The equation for the reaction is



A sample of pure NO_2 is placed in a sealed flask at 25°C . The flask is left until a dynamic equilibrium is reached.

- (a) For a reaction that is in dynamic equilibrium, the forward and backward reactions occur at the same time.

State two other features of a reaction that is in dynamic equilibrium.

(2)

1

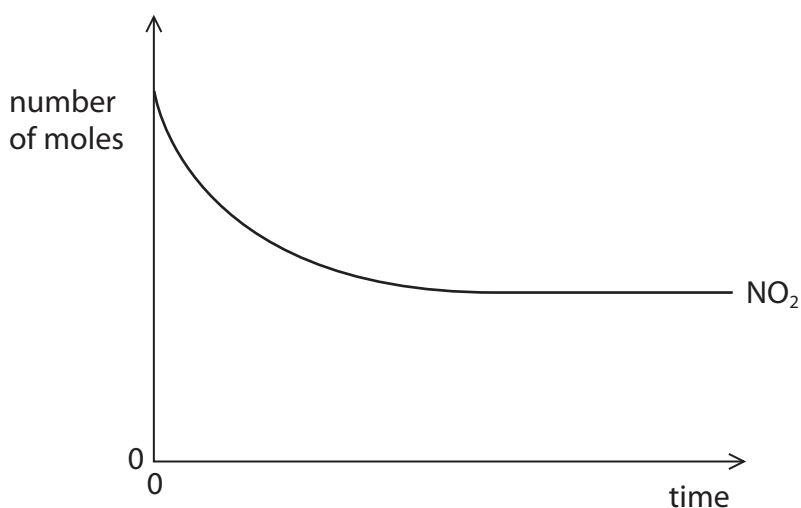
.....

2

.....

- (b) At equilibrium there is more NO_2 than N_2O_4

The graph shows how the number of moles of NO_2 in the sealed flask changes with time.



- (i) Draw a cross (X) on the graph at the point where the reaction reaches equilibrium. (1)

- (ii) Draw a curve on the graph to show how the number of moles of N_2O_4 in the sealed flask changes over the same time period. (3)



DO NOT WRITE IN THIS AREA

DO NOT WRITE IN THIS AREA

DO NOT WRITE IN THIS AREA

(c) The sealed flask containing the equilibrium mixture is placed in water at a temperature of 50°C. The mixture goes darker in colour.

Explain what this observation shows about the equilibrium reaction.

(2)

.....

.....

.....

.....

.....

.....

.....

(Total for Question 8 = 8 marks)

TOTAL FOR PAPER = 60 MARKS



DO NOT WRITE IN THIS AREA

DO NOT WRITE IN THIS AREA

DO NOT WRITE IN THIS AREA

BLANK PAGE

Every effort has been made to contact copyright holders to obtain their permission for the use of copyright material. Pearson Education Ltd. will, if notified, be happy to rectify any errors or omissions and include any such rectifications in future editions.

